

















Vigeregler 2 - motor

Vis med pile, hvilken vej bådene skal sejle.
Hvilken vigeregler har du brugt?

| | |
|---|---|
| <p>A </p> <p>B </p> | <p>C </p> <p>D </p> |
| | |
| <p>E </p> <p>F </p> | <p>G </p> <p>H </p> |
| | |
| <p>I </p> <p>J </p> | <p>K </p> <p>L </p> |
| | |
| <p>M </p> <p>N </p> | <p>O </p> <p>P </p> |
| | |